

NAME: _____

Purpose

To understand how to use percents to name fraction amounts that are less than 1

Math Words

percent

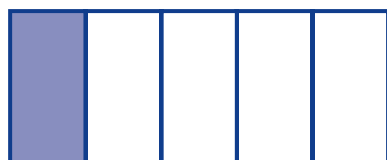
Percent is another way to write a fraction or a decimal amount. It compares an amount to 1 unit and is based on hundredths.

one unit

There are many ways to write one unit, such as 100%, $\frac{5}{5}$, 1.0, or 1000/1000.

Starter Problem

This diagram shows that $\frac{1}{5}$ of a school is painted.
What percent is painted?

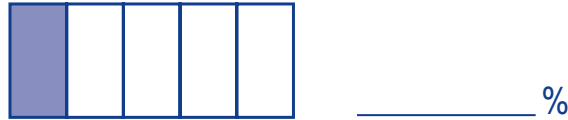


_____ %

NAME: _____

Starter Problem

This diagram shows that $\frac{1}{5}$ of a school is painted. What percent is painted?



Student Thinking



Angela

If they painted the whole school it would be 100%. So $\frac{1}{5}$ is the same as 20% painted.



Martin

$\frac{1}{5}$ is 15%. That's simple!

Pitfall

$$\frac{1}{5} = 15\%$$

Things to Remember

*

*




NAME: _____

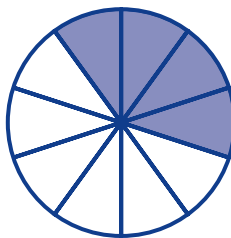
Our Turn

Write a lowest terms fraction and a percent for the amount of the drawing that is shaded.

1. _____ and _____ %



2. _____ and _____ %



3. _____ and _____ %



NAME: _____


My Turn

Write a lowest terms fraction and a percent for the amount of the drawing that is shaded.


1. _____ and _____ %



2. _____ and _____ %



3. _____ and _____ %




NAME: _____


Multiple Choice Mini Lesson

Fill in the circle next to the answer you choose.

1. What percent of the drawing is shaded?

☐ 34%☐ 75%☐ $\frac{3}{4}$ %☐ not given

2. What percent of the drawing is shaded?


☐ 20%☐ 26%☐ 40%☐ not given

NAME: _____


Multiple Choice Mini Lesson

Fill in the circle next to the answer you choose.

1. What percent of the drawing is shaded?

☐ 34%☐ 75%☐ $\frac{3}{4}$ %☐ not given

2. What percent of the drawing is shaded?

☐ 20%☐ 26%☐ 40%☐ not given

NAME: _____

Writing Task Mini Lesson

Explain why it is reasonable to say that about $\frac{1}{2}$ or 50% of this figure is shaded.





NAME: _____

Writing Task Mini Lesson

Explain why it is reasonable to say that about $\frac{1}{2}$ or 50% of this figure is shaded.